

Q.1 Tick (✓) the correct option

1] Which of these things is a living thing ?

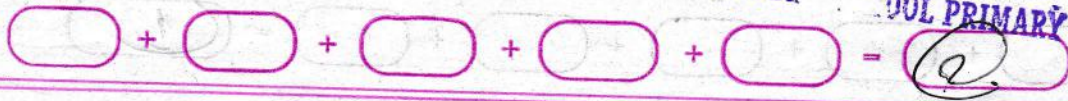
[a] Computer [b] Car

[c] Tree

2] Which part of the plant is called the "food factory" of the plant ?

[a] Root [b] Leaf

[c] Stem

4th  
class  
this

3) What do living things need for their growth.

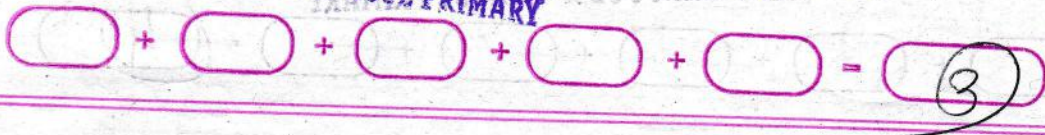
↳ [a] food [b] space

[c] House

4) Which of the following plants has support?  
taproots?

↳ [a] Balsam [b] Mustard  
[c] both [a] and [b]

5) Which of these is an example of a non-living thing?



[a] ant [b] elephant

↳ [c] car

[6] Growing of a new plant from a seed is called \_\_\_\_\_

↳ [a] germination [b] Stomata  
[c] Chlorophyll

[7] Honey is made from \_\_\_\_\_

[a] Sugar cane [b] Sugar

↳ [c] nectar

[8] Human beings, animals and plants are \_\_\_\_\_

↳ [a] Living things [b] Non-living things.  
[c] None of them

○ + ○ + ○ + ○ + ○ = 4

9) \_\_\_\_\_ are called natural non-living things.

[a] car and train

[b] radio and television

✓ [c] the sun and the moon

10) Fish breathe through their

[a] lungs ✓ [b] Gills

[c] tiny holes

11) The \_\_\_\_\_ is a long and thick main root.

✓ [a] taproot

[b] fibrous root

[c] Both [a] & [b]

[4]

$$\text{○} + \text{○} + \text{○} + \text{○} + \text{○} = \text{⑤}$$

12) \_\_\_\_\_ holds the plant firmly  
in the soil.

- ↳ [a] the root [b] the shoot  
[c] the stem

13) \_\_\_\_\_ are the green part  
of a plant.

- ↳ [a] leaves [b] flowers  
[c] fruits

14) \_\_\_\_\_ is made from the  
nectar produced by flowers.

- ↳ [a] Honey [b] seeds  
[c] shoot

$$\boxed{\phantom{0}} + \boxed{\phantom{0}} + \boxed{\phantom{0}} + \boxed{\phantom{0}} + \boxed{\phantom{0}} = \boxed{\phantom{0}}$$

Q2 Fill in the blanks

- 1) All man-made things are called non-living things.
- 2) Banana has soft and green stem.
- 3) Human beings breathe through their lungs.
- 4) The stem holds the plants upright.
- 5) Snakes use their bodies to crawl.
- 6) Most of the fruits have seeds inside them. [6]



## VEDANT PUBLIC SCHOOL

ISANPUR, AHMEDABAD - 382443.

DATE : તારીખ :	SUBJECT : વિષય :	Roll No. : ભેડ નંબર :
STD. : કોચ :	Suppl. No. : પૂરવણી :	Supervisor's Sign / ગિરીક્ષકની સહી

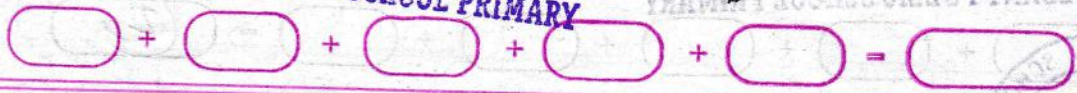
7] The flat and broad part of the leaf is called leaf blade

8] plants breathe through tiny pores called stomata.

9] The sunflower always turns its face towards the sun.

10] plants release oxygen

which is essential to us and animal.

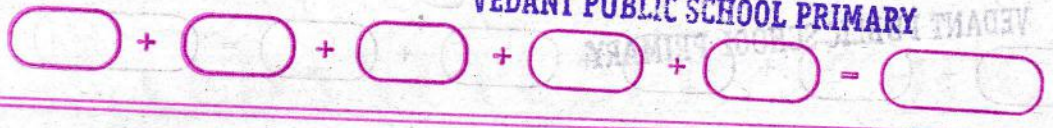


- 11) There are mainly two types of roots.
- 12) Fibrous roots grow from the end of stem and spread out.
- 13) Flowers are the most beautiful part of a plant.
- 14) Flowers are used in making perfumes.
- 15) Flowers are used for decorating homes.



424  
21424  
3415

9



16] Mango and litchi have  
only one seed inside  
them.




Q.3 True or False

1) Human beings, plants and animals are examples of non-living things. [ F ]

2) The sun, the moon, the earth, the rivers and the mountains are examples of natural-living things. [ T ]

3) Fish breathe through their gills. [ T ]



## VEDANT PUBLIC SCHOOL

ISANPUR, AHMEDABAD - 382443.

DATE : તારીખ :	SUBJECT : વિષય :	Roll No. : રોલ નંબર :
STD. : કોચ :	Suppl. No. : પૂરવણી :	Supervisor's Sign / નિરીક્ષકની સહી

4) Human beings and animals breathe through their lungs.

[T]

5) Animals can make their food [F]

6) Non-living things do not need food [T]

7) The sunflowers always turns its face towards the moon. [F]



8) Plants take in oxygen which we release [F]

9) There are four types of roots. [F]

10) Climbers and creepers have soft and weak stems. [T]

11) Flowers are used in making perfumes. [T]

12) Banana and pineapple have many seeds. [F]

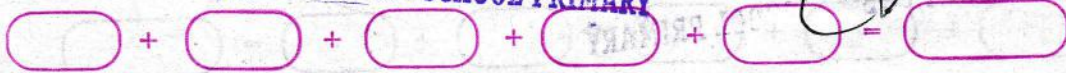
42-1  
42-1  
415

Q-4 Name the parts of  
the plant


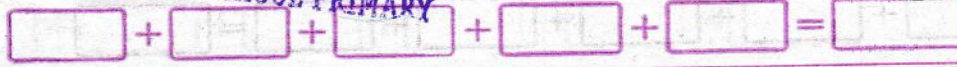
1) It makes food for  
the plant, leaf

2) It helps in carrying  
water and minerals  
from the roots to  
the leaves, stem

3) It holds the plant  
firmly in the  
soil, root



4) It helps in reproduction  
and produces fruits  
and seeds. flower.



Q.5 Answer the following questions

1) Name any five living things.

A.) man, lion, plant, fish and ant.

2) Name any four non-living things.

A) pen, book, house and table.

3) What does a fish use for swimming?

A) A fish uses its fins and tails for swimming.

$$\square + \square + \square + \square + \square = \square$$

4) How do we disturb the balance in nature?

A) We disturb the balance in nature by cutting and killing animals.

5) What is the stem?

A) The stem is the main part of a plant.

6) What are the uses of flowers?

A) Flowers are used to make perfumes and decorate homes.



$$\square + \square + \square + \square + \square = \square$$

7] Name any five parts of a plant?

8] Root, stem, flower, leaf and fruit.

9] What are fibrous roots?

10] Fibrous roots grow from the end of the stem and spread out.

11] What is chlorophyll?

12] Chlorophyll is a pigment that provides green colour to the leaves.

VEDANT PUBLIC SCHOOL PRIMARY

VEDANT PUBLIC SCHOOL PRIMARY

18

□ + □ + □ + □ + □ - □

10] Write any three features of living things.

A-10] (i) Living things grow.

(ii) Living things show movement.

(iii) Living things need food.

VEDANT PUBLIC SCHOOL PRIMARY

18